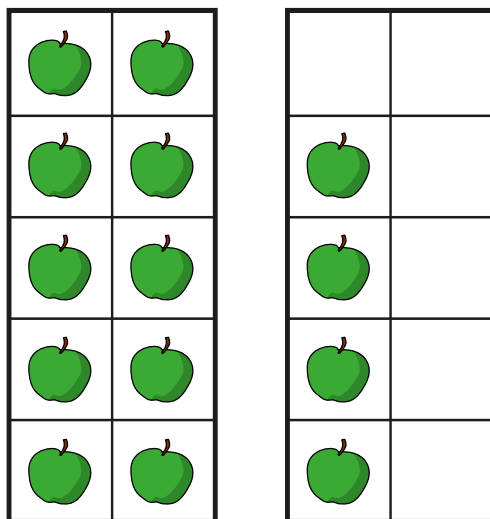
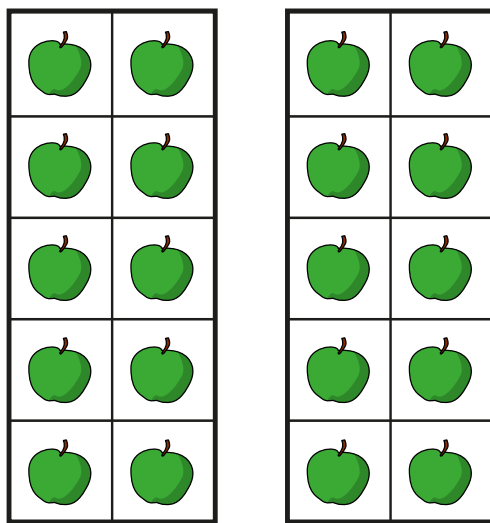


Tens and ones

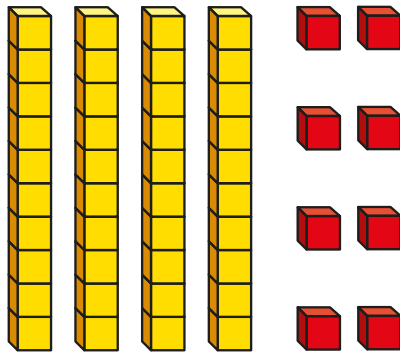
I How many apples are there?



There are tens and ones.

There are apples.

2 What number is shown?




There are tens and ones.

The number shown is

3 Draw base 10 to show each number.

a) 23

b) 3 tens and 2 ones



4 Complete the number sentences.

a) 1 ten and 8 ones =

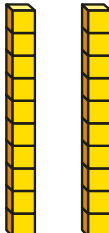
b) = 2 tens and 5 ones

c) 41 = tens and one

d) 37 ones = tens and ones

e) 2 tens and 10 ones =

5 Eva and Jack are making the same number.

Eva's number has these tens. 

Jack's number has nine ones.

What number are Eva and Jack making?

